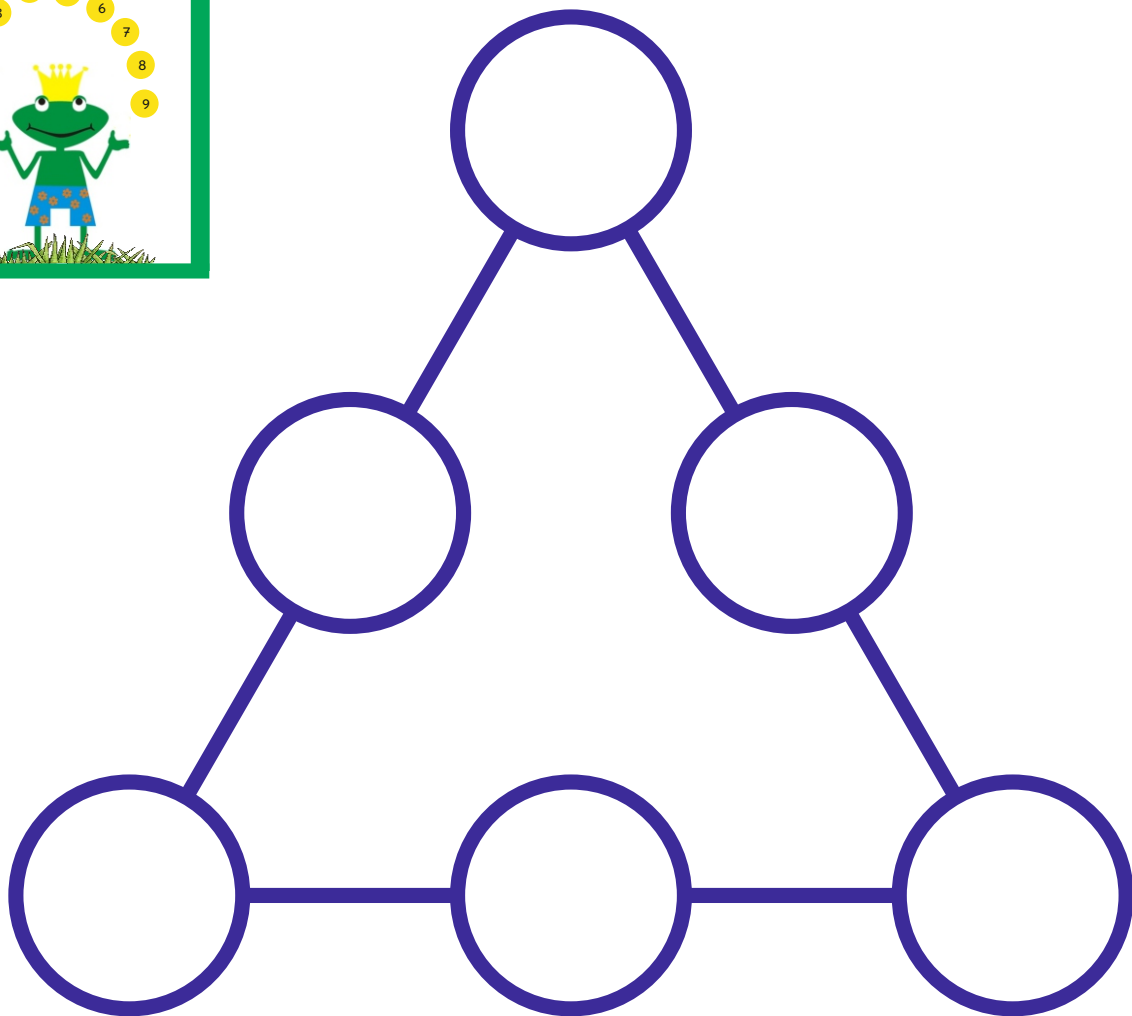
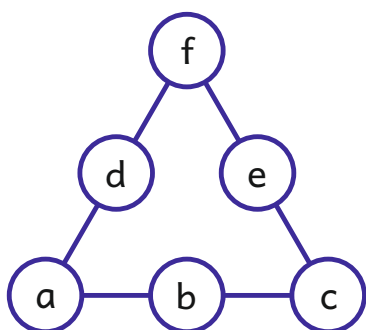


Rechnen und Knobeln mit Ziffernplättchen: Gleiche Summen im Dreieck



www.mathemonsterchen.de



$$a + b + c = a + d + f = c + e + f$$

Die Karten 1 - 16 sind durch Rechnen zu lösen.
Bei den Karten 17 - 32 muss geknobelt werden.

Die Ziffern von 1 bis 9 dürfen nur jeweils einmal verwendet werden.

Die Aufgaben sollten möglichst auf dem Plan gelegt werden.

1

$\bigcirc + \bigcirc + \bigcirc = 9$

www.mathemonsterchen.de

2

$\bigcirc + \bigcirc + \bigcirc = 10$

www.mathemonsterchen.de

3

$\bigcirc + \bigcirc + \bigcirc = 11$

www.mathemonsterchen.de

4

$\bigcirc + \bigcirc + \bigcirc = 12$

www.mathemonsterchen.de

5

$\bigcirc + \bigcirc + \bigcirc = 13$

www.mathemonsterchen.de

6

$\bigcirc + \bigcirc + \bigcirc = 14$

www.mathemonsterchen.de

7

$\bigcirc + \bigcirc + \bigcirc = 15$

www.mathemonsterchen.de

8

$\bigcirc + \bigcirc + \bigcirc = 16$

www.mathemonsterchen.de

9

$\bigcirc + \bigcirc + \bigcirc = 10$

www.mathemonsterchen.de

10

$\bigcirc + \bigcirc + \bigcirc = 14$

www.mathemonsterchen.de

11

$\bigcirc + \bigcirc + \bigcirc = 18$

www.mathemonsterchen.de

12

$\bigcirc + \bigcirc + \bigcirc = 16$

www.mathemonsterchen.de

13

$\bigcirc + \bigcirc + \bigcirc = 13$

www.mathemonsterchen.de

14

$\bigcirc + \bigcirc + \bigcirc = 14$

www.mathemonsterchen.de

15

$\bigcirc + \bigcirc + \bigcirc = 12$

www.mathemonsterchen.de

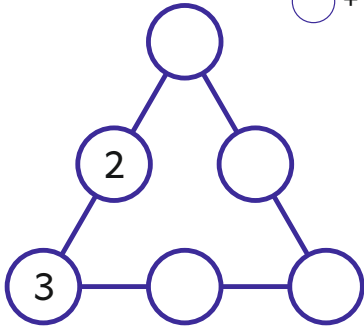
16

$\bigcirc + \bigcirc + \bigcirc = 15$

www.mathemonsterchen.de

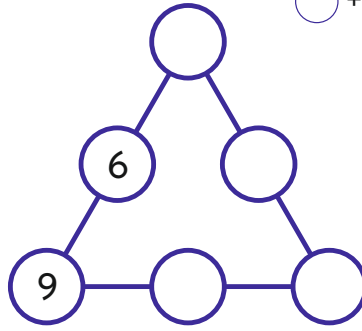
17

$$\bigcirc + \bigcirc + \bigcirc = 13$$


www.mathemonsterchen.de

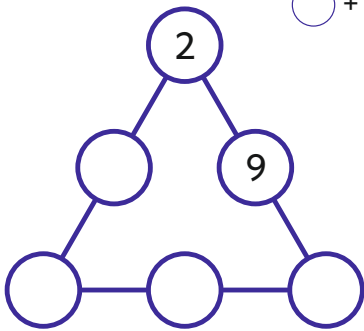
18

$$\bigcirc + \bigcirc + \bigcirc = 19$$


www.mathemonsterchen.de

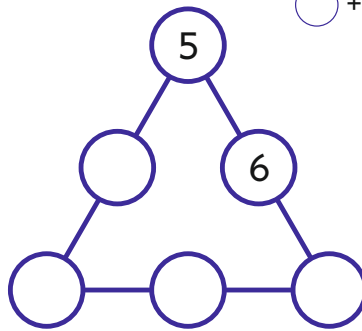
19

$$\bigcirc + \bigcirc + \bigcirc = 12$$


www.mathemonsterchen.de

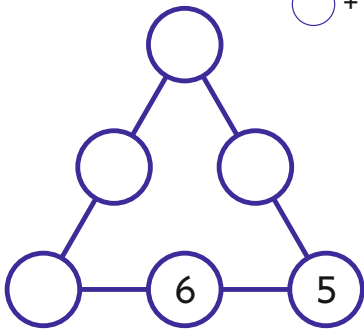
20

$$\bigcirc + \bigcirc + \bigcirc = 15$$


www.mathemonsterchen.de

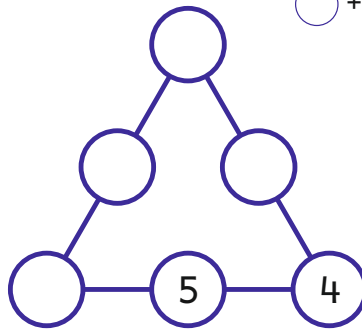
21

$$\bigcirc + \bigcirc + \bigcirc = 15$$


www.mathemonsterchen.de

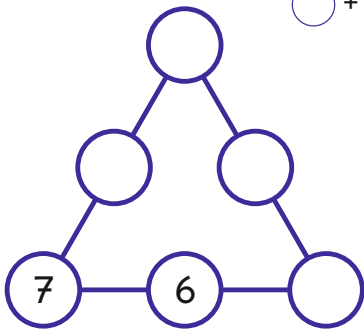
22

$$\bigcirc + \bigcirc + \bigcirc = 12$$


www.mathemonsterchen.de

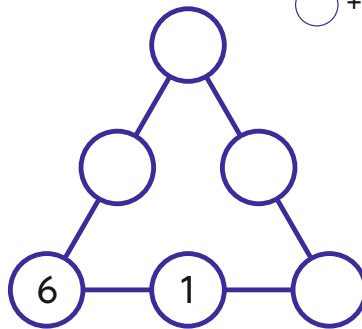
23

$$\bigcirc + \bigcirc + \bigcirc = 18$$


www.mathemonsterchen.de

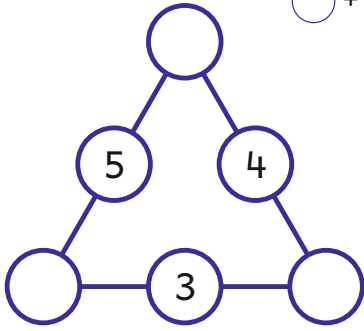
24

$$\bigcirc + \bigcirc + \bigcirc = 11$$


www.mathemonsterchen.de

25

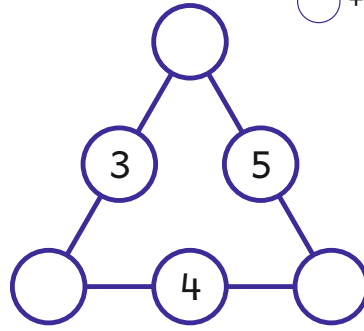
$\bigcirc + \bigcirc + \bigcirc = 20$



www.mathemonsterchen.de

26

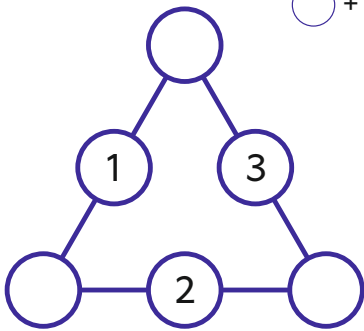
$\bigcirc + \bigcirc + \bigcirc = 18$



www.mathemonsterchen.de

27

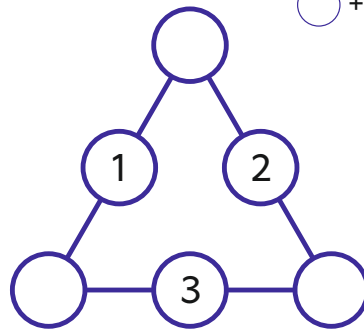
$\bigcirc + \bigcirc + \bigcirc = 14$



www.mathemonsterchen.de

28

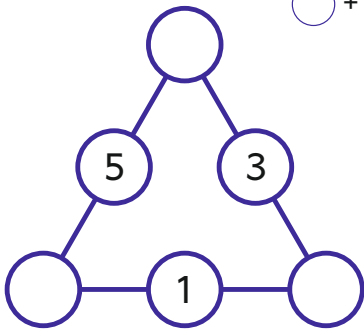
$\bigcirc + \bigcirc + \bigcirc = 18$



www.mathemonsterchen.de

29

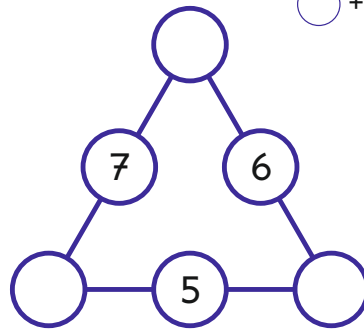
$\bigcirc + \bigcirc + \bigcirc = 11$



www.mathemonsterchen.de

30

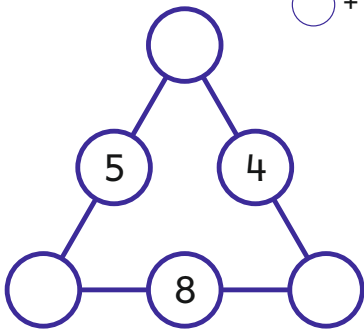
$\bigcirc + \bigcirc + \bigcirc = 10$



www.mathemonsterchen.de

31

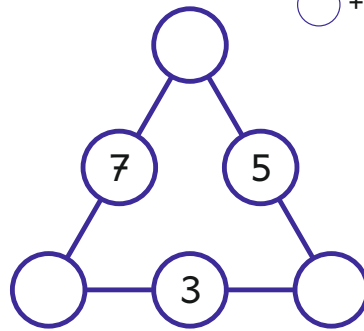
$\bigcirc + \bigcirc + \bigcirc = 13$



www.mathemonsterchen.de

32

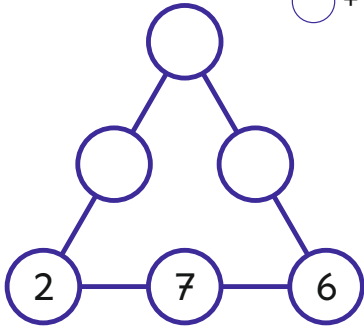
$\bigcirc + \bigcirc + \bigcirc = 13$



www.mathemonsterchen.de

33

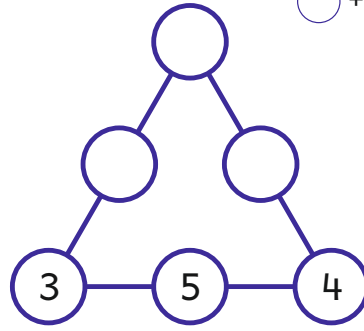
$\bigcirc + \bigcirc + \bigcirc = ?$



www.mathemonsterchen.de

34

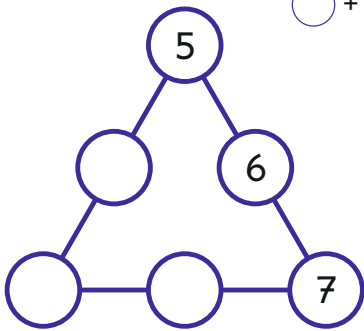
$\bigcirc + \bigcirc + \bigcirc = ?$



www.mathemonsterchen.de

35

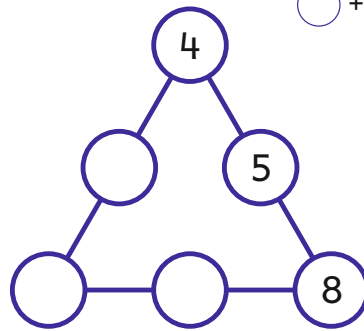
$\bigcirc + \bigcirc + \bigcirc = ?$



www.mathemonsterchen.de

36

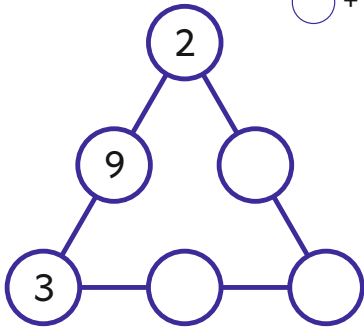
$\bigcirc + \bigcirc + \bigcirc = ?$



www.mathemonsterchen.de

37

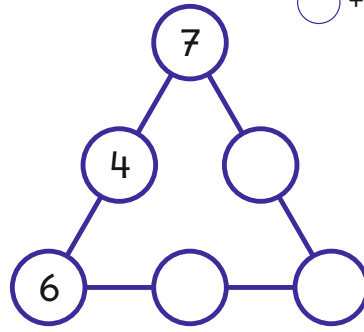
$\bigcirc + \bigcirc + \bigcirc = ?$



www.mathemonsterchen.de

38

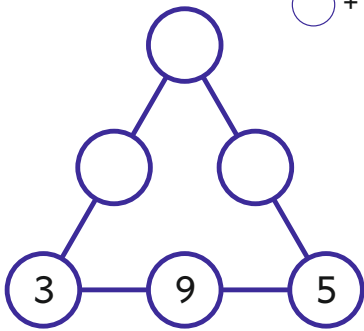
$\bigcirc + \bigcirc + \bigcirc = ?$



www.mathemonsterchen.de

39

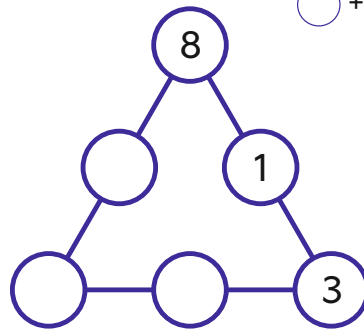
$\bigcirc + \bigcirc + \bigcirc = ?$



www.mathemonsterchen.de

40

$\bigcirc + \bigcirc + \bigcirc = ?$



www.mathemonsterchen.de

Lösungskärtchen:

<p>1 $\circ + \circ + \circ = 9$</p> <p>www.mathemester.de</p>	<p>2 $\circ + \circ + \circ = 10$</p> <p>www.mathemester.de</p>	<p>3 $\circ + \circ + \circ = 10$</p> <p>www.mathemester.de</p>	<p>4 $\circ + \circ + \circ = 14$</p> <p>www.mathemester.de</p>
<p>5 $\circ + \circ + \circ = 11$</p> <p>www.mathemester.de</p>	<p>6 $\circ + \circ + \circ = 12$</p> <p>www.mathemester.de</p>	<p>7 $\circ + \circ + \circ = 18$</p> <p>www.mathemester.de</p>	<p>8 $\circ + \circ + \circ = 16$</p> <p>www.mathemester.de</p>
<p>9 $\circ + \circ + \circ = 13$</p> <p>www.mathemester.de</p>	<p>10 $\circ + \circ + \circ = 14$</p> <p>www.mathemester.de</p>	<p>11 $\circ + \circ + \circ = 13$</p> <p>www.mathemester.de</p>	<p>12 $\circ + \circ + \circ = 14$</p> <p>www.mathemester.de</p>
<p>13 $\circ + \circ + \circ = 15$</p> <p>www.mathemester.de</p>	<p>14 $\circ + \circ + \circ = 16$</p> <p>www.mathemester.de</p>	<p>15 $\circ + \circ + \circ = 12$</p> <p>www.mathemester.de</p>	<p>16 $\circ + \circ + \circ = 15$</p> <p>www.mathemester.de</p>
<p>17 $\circ + \circ + \circ = 13$</p> <p>www.mathemester.de</p>	<p>18 $\circ + \circ + \circ = 19$</p> <p>www.mathemester.de</p>	<p>19 $\circ + \circ + \circ = 20$</p> <p>www.mathemester.de</p>	<p>20 $\circ + \circ + \circ = 18$</p> <p>www.mathemester.de</p>
<p>21 $\circ + \circ + \circ = 12$</p> <p>www.mathemester.de</p>	<p>22 $\circ + \circ + \circ = 15$</p> <p>www.mathemester.de</p>	<p>23 $\circ + \circ + \circ = 14$</p> <p>www.mathemester.de</p>	<p>24 $\circ + \circ + \circ = 18$</p> <p>www.mathemester.de</p>
<p>25 $\circ + \circ + \circ = 15$</p> <p>www.mathemester.de</p>	<p>26 $\circ + \circ + \circ = 12$</p> <p>www.mathemester.de</p>	<p>27 $\circ + \circ + \circ = 11$</p> <p>www.mathemester.de</p>	<p>28 $\circ + \circ + \circ = 10$</p> <p>www.mathemester.de</p>
<p>29 $\circ + \circ + \circ = 18$</p> <p>www.mathemester.de</p>	<p>30 $\circ + \circ + \circ = 11$</p> <p>www.mathemester.de</p>	<p>31 $\circ + \circ + \circ = 13$</p> <p>www.mathemester.de</p>	<p>32 $\circ + \circ + \circ = 13$</p> <p>www.mathemester.de</p>

1 2 3 4 5

6 7 8 9

1 2 3 4 5

6 7 8 9