

1

$$\begin{matrix} \text{bird} & + & \text{bird} & + & \text{bird} & = & 18 \end{matrix}$$

$$\begin{matrix} \text{bird} & + & \text{flower} & + & \text{flower} & = & 16 \end{matrix}$$

$$\begin{matrix} \text{butterfly} & + & \text{butterfly} & + & \text{flower} & = & 19 \end{matrix}$$

$$\begin{matrix} \text{bird} & \cdot & \text{butterfly} & + & \text{flower} & = & ? \end{matrix}$$

$$\begin{matrix} \text{bird} & = & \text{flower} & = & \text{butterfly} & = & \end{matrix}$$

$$? = \underline{\hspace{2cm}}$$

www.mathemonsterchen.de

2

$$\begin{matrix} \text{butterfly} & + & \text{butterfly} & + & \text{butterfly} & = & 30 \end{matrix}$$

$$\begin{matrix} \text{butterfly} & + & \text{bird} & + & \text{bird} & = & 26 \end{matrix}$$

$$\begin{matrix} \text{bird} & + & \text{flower} & + & \text{flower} & = & 24 \end{matrix}$$

$$\begin{matrix} \text{butterfly} & \cdot & \text{flower} & + & \text{bird} & = & ? \end{matrix}$$

$$\begin{matrix} \text{butterfly} & = & \text{bird} & = & \text{flower} & = & \end{matrix}$$

$$? = \underline{\hspace{2cm}}$$

www.mathemonsterchen.de

3

$$\begin{matrix} \text{bird} & + & \text{bird} & + & \text{bird} & = & 27 \end{matrix}$$

$$\begin{matrix} \text{flower} & + & \text{flower} & + & \text{bird} & = & 15 \end{matrix}$$

$$\begin{matrix} \text{butterfly} & + & \text{butterfly} & + & \text{flower} & = & 19 \end{matrix}$$

$$\begin{matrix} \text{butterfly} & \cdot & \text{flower} & + & \text{bird} & = & ? \end{matrix}$$

$$\begin{matrix} \text{bird} & = & \text{flower} & = & \text{butterfly} & = & \end{matrix}$$

$$? = \underline{\hspace{2cm}}$$

www.mathemonsterchen.de

4

$$\begin{matrix} \text{flower} & + & \text{flower} & + & \text{flower} & = & 30 \end{matrix}$$

$$\begin{matrix} \text{butterfly} & + & \text{butterfly} & + & \text{flower} & = & 42 \end{matrix}$$

$$\begin{matrix} \text{bird} & + & \text{bird} & + & \text{butterfly} & = & 24 \end{matrix}$$

$$\begin{matrix} \text{flower} & \cdot & \text{bird} & + & \text{butterfly} & = & ? \end{matrix}$$

$$\begin{matrix} \text{flower} & = & \text{butterfly} & = & \text{bird} & = & \end{matrix}$$

$$? = \underline{\hspace{2cm}}$$

www.mathemonsterchen.de

5

$$\begin{array}{c} \text{2 birds} \\ + \\ \text{1 bird} \\ + \\ \text{1 bird} \\ = 12 \end{array}$$

$$\begin{array}{c} \text{1 flower} \\ + \\ \text{1 flower} \\ + \\ \text{2 birds} \\ = 10 \end{array}$$

$$\begin{array}{c} \text{2 butterflies} \\ + \\ \text{2 butterflies} \\ + \\ \text{1 flower} \\ = 30 \end{array}$$

$$\begin{array}{c} \text{2 butterflies} \\ \cdot \\ \text{1 flower} \\ + \\ \text{2 birds} \\ = ? \end{array}$$

$$\begin{array}{c} \text{1 bird} = \underline{\quad} \\ \text{1 flower} = \underline{\quad} \\ \text{1 butterfly} = \underline{\quad} \end{array}$$

$$? = \underline{\quad}$$

www.mathemonsterchen.de

6

$$\begin{array}{c} \text{1 bird} \\ + \\ \text{1 bird} \\ + \\ \text{1 bird} \\ = 12 \end{array}$$

$$\begin{array}{c} \text{1 butterfly} \\ + \\ \text{2 birds} \\ + \\ \text{2 birds} \\ = 22 \end{array}$$

$$\begin{array}{c} \text{1 flower} \\ + \\ \text{1 flower} \\ + \\ \text{1 butterfly} \\ = 24 \end{array}$$

$$\begin{array}{c} \text{1 flower} \\ \cdot \\ \text{1 butterfly} \\ + \\ \text{2 birds} \\ = ? \end{array}$$

$$\begin{array}{c} \text{1 bird} = \underline{\quad} \\ \text{1 butterfly} = \underline{\quad} \\ \text{1 flower} = \underline{\quad} \end{array}$$

$$? = \underline{\quad}$$

www.mathemonsterchen.de

7

$$\begin{array}{c} \text{3 butterflies} \\ + \\ \text{3 butterflies} \\ + \\ \text{3 butterflies} \\ = 48 \end{array}$$

$$\begin{array}{c} \text{1 butterfly} \\ + \\ \text{2 butterflies} \\ + \\ \text{2 butterflies} \\ = 28 \end{array}$$

$$\begin{array}{c} \text{1 flower} \\ + \\ \text{1 flower} \\ + \\ \text{1 butterfly} \\ = 16 \end{array}$$

$$\begin{array}{c} \text{2 butterflies} \\ \cdot \\ \text{1 flower} \\ + \\ \text{1 butterfly} \\ = ? \end{array}$$

$$\begin{array}{c} \text{1 butterfly} = \underline{\quad} \\ \text{1 butterfly} = \underline{\quad} \\ \text{1 flower} = \underline{\quad} \end{array}$$

$$? = \underline{\quad}$$

www.mathemonsterchen.de

8

$$\begin{array}{c} \text{2 birds} \\ + \\ \text{2 birds} \\ + \\ \text{2 birds} \\ = 54 \end{array}$$

$$\begin{array}{c} \text{2 birds} \\ + \\ \text{2 birds} \\ + \\ \text{2 birds} \\ = 48 \end{array}$$

$$\begin{array}{c} \text{2 birds} \\ + \\ \text{1 flower} \\ + \\ \text{1 flower} \\ = 16 \end{array}$$

$$\begin{array}{c} \text{2 birds} \\ \cdot \\ \text{1 flower} \\ + \\ \text{1 bird} \\ = ? \end{array}$$

$$\begin{array}{c} \text{1 bird} = \underline{\quad} \\ \text{1 bird} = \underline{\quad} \\ \text{1 flower} = \underline{\quad} \end{array}$$

$$? = \underline{\quad}$$

www.mathemonsterchen.de

9

 +  +  = 63

 •  +  = 45




 +  +  = 16

 •  +  = ?

 = _____  = _____  = _____

? = _____

10

 +  +  = 18

 •  +  = 35




 +  +  = 37

 •  +  = ?

 = _____  = _____  = _____

? = _____

11

 +  +  = 72

 •  +  = 72

 +  +  = 32

 •  +  = ?

 = _____  = _____  = _____

? = _____

12

 +  +  = 14

 •  +  = 48

 +  +  = 24

 •  +  = ?

 = _____  = _____  = _____

? = _____

13

 •  +  = 21

 •  = 28

 •  = 65

 +  +  = ?

 = ___  = ___  = ___




? = _____

14

 •  +  = 90

 •  +  = 99

 •  +  = 65

 +  +  = ?

 = ___  = ___  = ___

? = _____

15

 •  +  = 56

 •  +  = 49

 •  +  = 44

 +  +  = ?

 = ___  = ___  = ___

? = _____

16

 •  +  = 72

 •  +  = 90

 •  +  = 46

 +  +  = ?

 = ___  = ___  = ___

? = _____

17

$$\text{flower} \cdot \text{flower} \cdot \text{flower} = 27$$

$$\text{flower} + \text{flower} + \text{bird} = 30$$

$$\text{bird} \cdot \text{flower} + \text{butterfly} = 36$$

$$\text{bird} \cdot \text{butterfly} + \text{flower} = ?$$

$$\text{flower} = \underline{\quad} \quad \text{bird} = \underline{\quad} \quad \text{butterfly} = \underline{\quad}$$

$$? = \underline{\quad}$$

www.mathemonsterchen.de

18

$$\text{flower} \cdot \text{flower} \cdot \text{flower} = 8$$

$$\text{flower} + \text{flower} + \text{bird} = 32$$

$$\text{bird} \cdot \text{butterfly} + \text{flower} = 60$$

$$\text{bird} \cdot \text{flower} + \text{butterfly} = ?$$

$$\text{flower} = \underline{\quad} \quad \text{bird} = \underline{\quad} \quad \text{butterfly} = \underline{\quad}$$

$$? = \underline{\quad}$$

www.mathemonsterchen.de

19

$$\text{butterfly} \cdot \text{butterfly} \cdot \text{butterfly} = 64$$

$$\text{butterfly} + \text{butterfly} + \text{butterfly} = 62$$

$$\text{butterfly} \cdot \text{butterfly} + \text{flower} = 42$$

$$\text{flower} \cdot \text{butterfly} + \text{butterfly} = ?$$

$$\text{butterfly} = \underline{\quad} \quad \text{butterfly} = \underline{\quad} \quad \text{flower} = \underline{\quad}$$

$$? = \underline{\quad}$$

www.mathemonsterchen.de

20

$$\text{bird} \cdot \text{bird} \cdot \text{bird} = 27$$

$$\text{bird} + \text{bird} + \text{bird} = 36$$

$$\text{bird} \cdot \text{bird} + \text{butterfly} = 72$$

$$\text{butterfly} \cdot \text{bird} + \text{bird} = ?$$




$$\text{bird} = \underline{\quad} \quad \text{bird} = \underline{\quad} \quad \text{butterfly} = \underline{\quad}$$




$$? = \underline{\quad}$$




www.mathemonsterchen.de









Frühlingsrätsel




①  = 3  = 5  = 7
? = 26




②  = 6  = 7  = 5
? = 37




③  = 9  = 3  = 4
? = 33

④  = 10  = 8  = 4
? = 48

⑤  = 3  = 2  = 7
? = 34

⑥  = 4  = 6  = 9
? = 62

⑦  = 8  = 5  = 3
? = 38

⑧  = 9  = 6  = 2
? = 33

9

 = 7  = 3  = 4

? = 34

10

 = 3  = 5  = 9

? = 24

11

 = 7  = 6  = 8

? = 50

12

 = 2  = 9  = 6

? = 36

13

 = 3  = 7  = 8

? = 18

14

 = 5  = 9  = 6


? = 40

15

 = 7  = 4  = 5

? = 38

16

 = 8  = 6  = 10

? = 44

17

 = 3  = 4  = 6

? = 30

18

 = 2  = 8  = 7

? = 23

19

 = 4  = 9  = 2

? = 62

20

 = 3  = 10  = 6

? = 28