
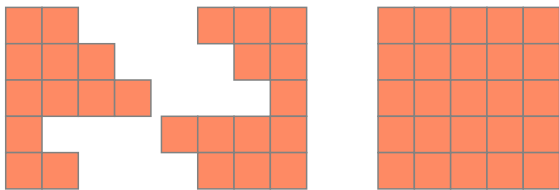
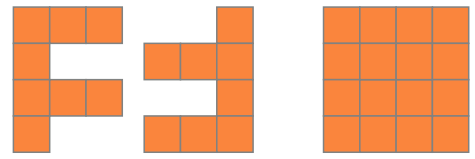
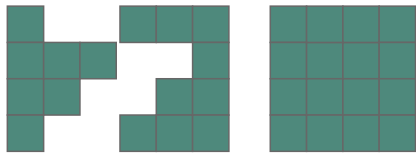
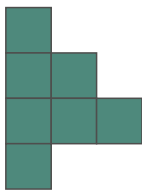


Quadratpuzzles

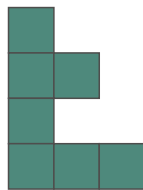
Welche beiden Teile ergeben ein Quadrat ?



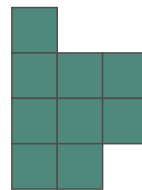
Welche beiden Teile ergeben ein Quadrat ?



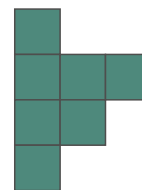
1




2



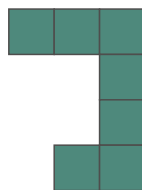
3



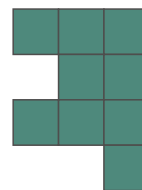
4




5



6



7



8

___ und ___

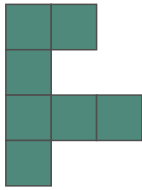
___ und ___

___ und ___


___ und ___



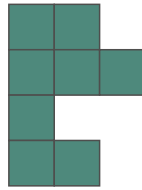
Welche beiden Teile ergeben ein Quadrat ?



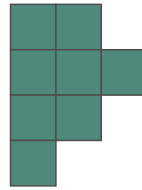
1




2




3



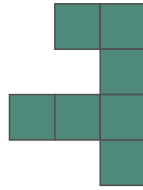
4



5



6



7



8

___ und ___

___ und ___

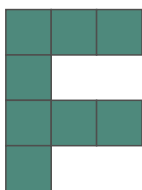
___ und ___

___ und ___




2


Welche beiden Teile ergeben ein Quadrat ?




1



2




3




4



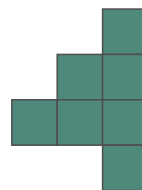
5



6



7



8

___ und ___

___ und ___


___ und ___

___ und ___




3


Welche beiden Teile ergeben ein Quadrat ?




1




2




3



4




5



6



7



8

___ und ___

___ und ___


___ und ___

___ und ___


4




Welche beiden Teile ergeben ein Quadrat ?




1




2



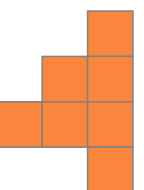
3



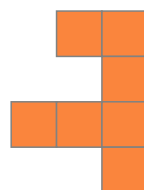
4



5



6



7



8

___ und ___

___ und ___


___ und ___

___ und ___


5




Welche beiden Teile ergeben ein Quadrat ?




1




2



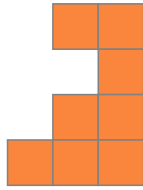
3



4




5



6



7



8

___ und ___

___ und ___


___ und ___

___ und ___

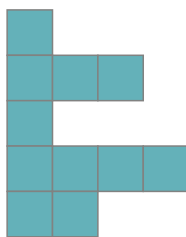
6




Welche beiden Teile ergeben ein Quadrat ?



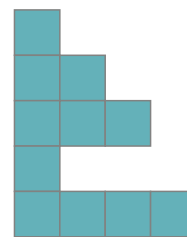
1




2




3




4




5



6



7



8

___ und ___

___ und ___

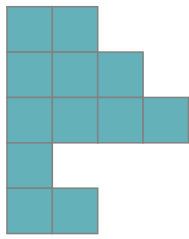
___ und ___

___ und ___

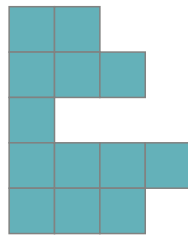
7




Welche beiden Teile ergeben ein Quadrat ?




1




2




3




4




5



6



7



8

___ und ___

___ und ___


___ und ___

___ und ___


8




Welche beiden Teile ergeben ein Quadrat ?



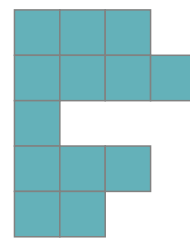
1




2




3




4




5



6



7



8

___ und ___

___ und ___


___ und ___

___ und ___


9




Welche beiden Teile ergeben ein Quadrat ?




1



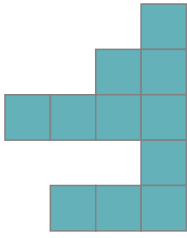
2




3




4




5



6



7



8

___ und ___

___ und ___


___ und ___

___ und ___

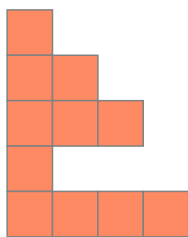
10



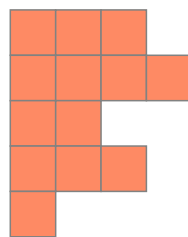
Welche beiden Teile ergeben ein Quadrat ?



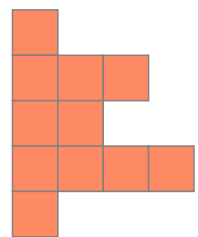
1




2



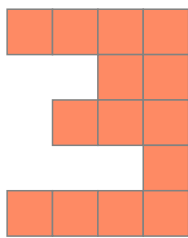
3



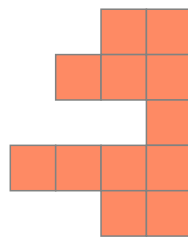
4



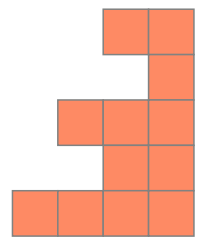
5



6



7



8

___ und ___

___ und ___


___ und ___

___ und ___

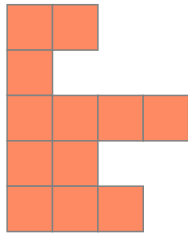
11




Welche beiden Teile ergeben ein Quadrat ?




1



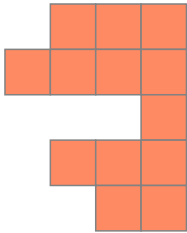
2



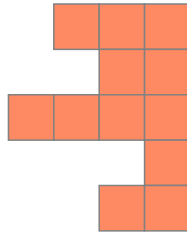
3



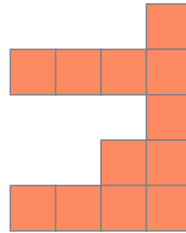
4



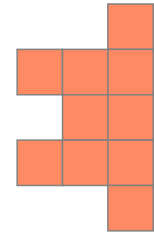
5



6



7



8

___ und ___

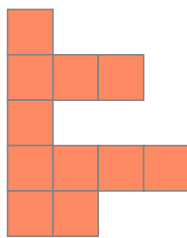
___ und ___

___ und ___

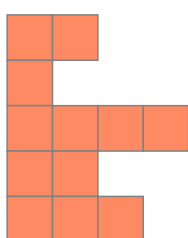
___ und ___



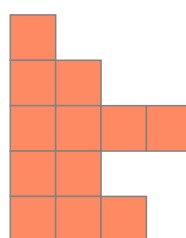
Welche beiden Teile ergeben ein Quadrat ?



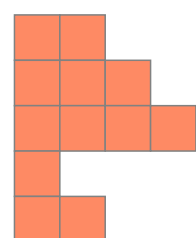
1



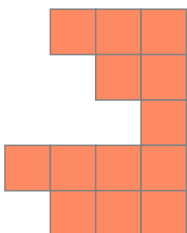
2




3




4



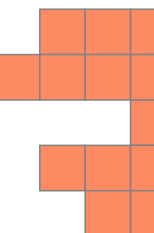
5



6



7



8

___ und ___

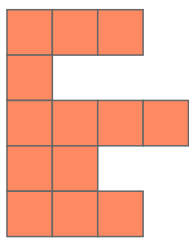
___ und ___

___ und ___

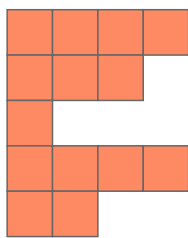
___ und ___



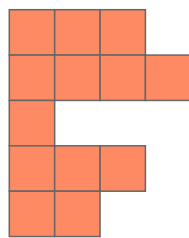
Welche beiden Teile ergeben ein Quadrat ?



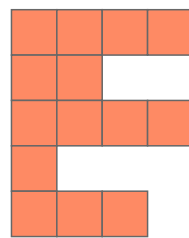
1



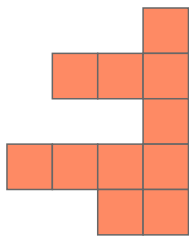
2



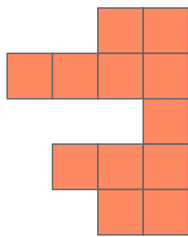
3



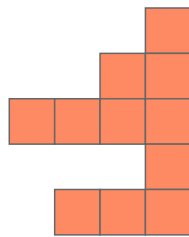
4



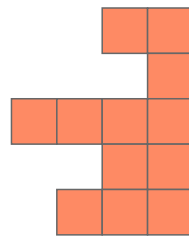
5



6



7



8

___ und ___

___ und ___

___ und ___

___ und ___

Lösungen:

- | | |
|--|---|
| 1 1 und 5 2 und 7 3 und 6 4 und 8 | 8 1 und 8 2 und 6 3 und 7 4 und 5 |
| 2 1 und 8 2 und 7 3 und 5 4 und 6 | 9 1 und 6 2 und 8 3 und 5 4 und 7 |
| 3 1 und 7 2 und 8 3 und 5 4 und 6 | 10 1 und 7 2 und 8 3 und 5 4 und 6 |
| 4 1 und 7 2 und 8 3 und 5 4 und 6 | 11 1 und 7 2 und 5 3 und 8 4 und 6 |
| 5 1 und 6 2 und 8 3 und 7 4 und 5 | 12 1 und 8 2 und 5 3 und 7 4 und 6 |
| 6 1 und 7 2 und 8 3 und 6 4 und 5 | 13 1 und 6 2 und 8 3 und 7 4 und 5 |
| 7 1 und 8 2 und 5 3 und 6 4 und 7 | 14 1 und 6 2 und 7 3 und 8 4 und 5 |